

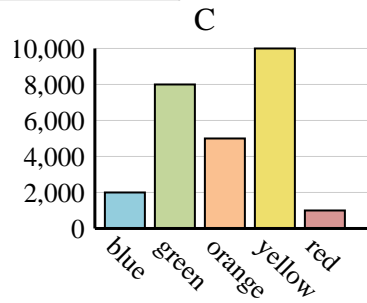
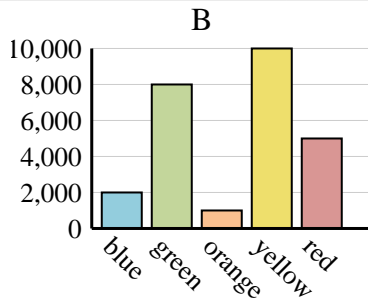
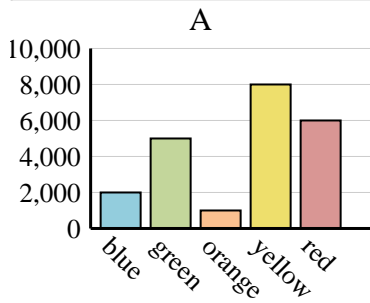


Determine which graph (A, B or C) best represents the information in the table.

Answers

1)

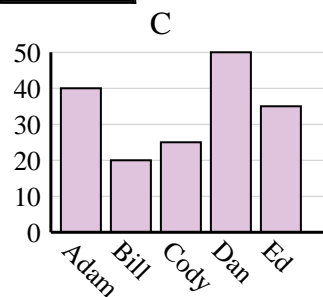
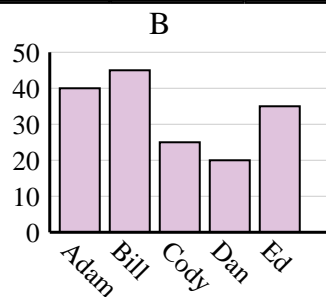
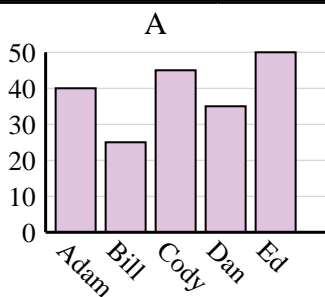
Favorite Color	blue	green	orange	yellow	red
People	2,000	8,000	1,000	10,000	5,000



1. _____
2. _____
3. _____
4. _____

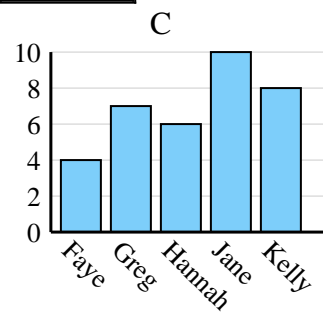
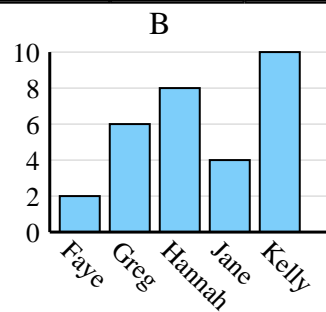
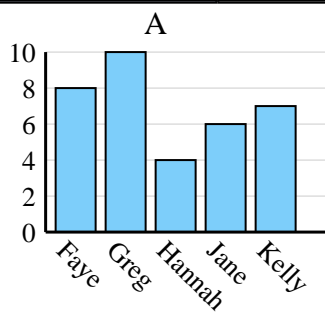
2)

Name	Adam	Bill	Cody	Dan	Ed
Points	40	20	25	50	35



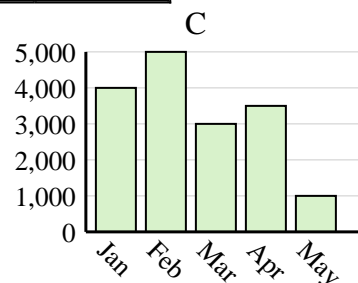
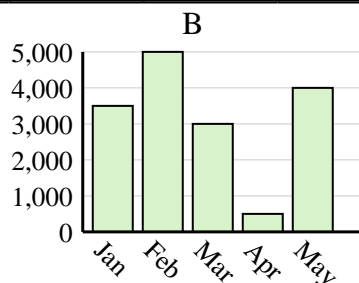
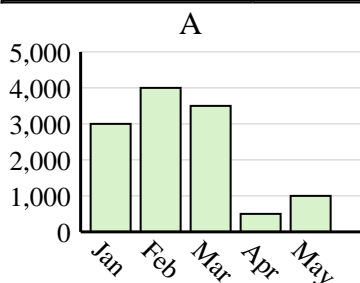
3)

Name	Faye	Greg	Hannah	Jane	Kelly
States Lived In	8	10	4	6	7



4)

Sales	Jan	Feb	Mar	Apr	May
Month	4,000	5,000	3,000	3,500	1,000

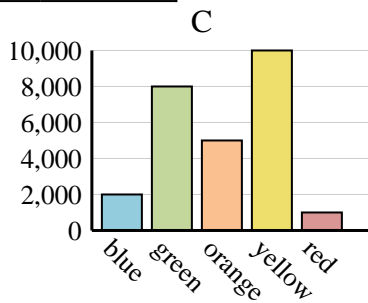
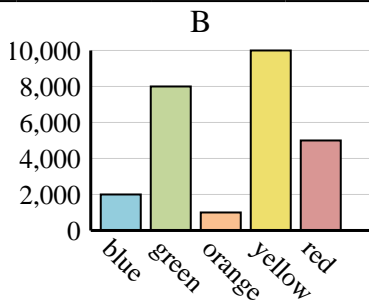
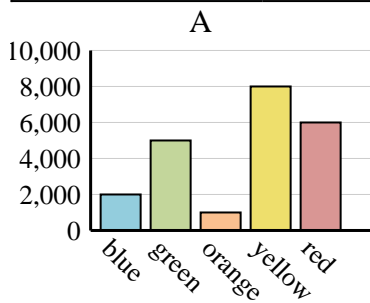




Determine which graph (A, B or C) best represents the information in the table.

Answers

Favorite Color	blue	green	orange	yellow	red
People	2,000	8,000	1,000	10,000	5,000



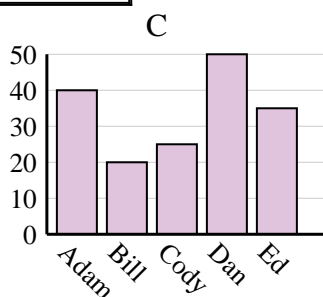
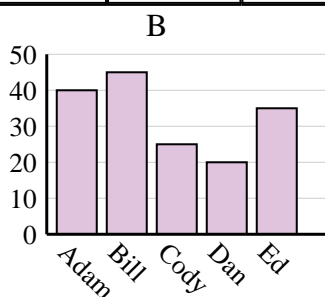
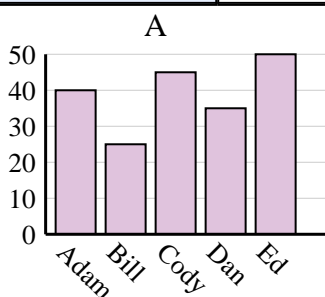
1. **B**

2. **C**

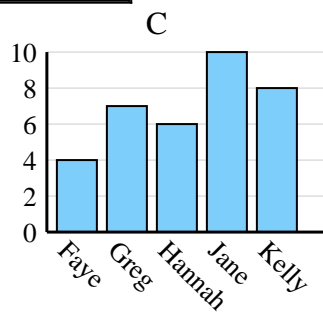
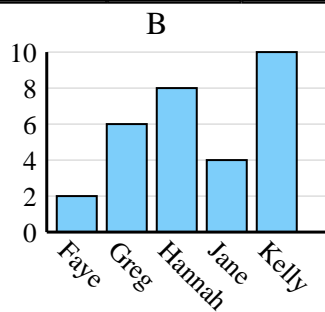
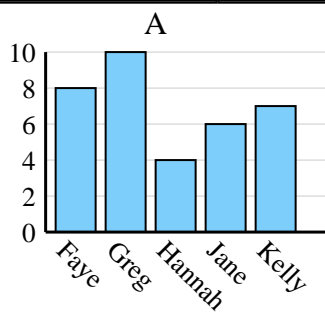
3. **A**

4. **C**

Name	Adam	Bill	Cody	Dan	Ed
Points	40	20	25	50	35



Name	Faye	Greg	Hannah	Jane	Kelly
States Lived In	8	10	4	6	7



Sales	Jan	Feb	Mar	Apr	May
Month	4,000	5,000	3,000	3,500	1,000

